




ZBRAJANJE S PRIJELAZOM DESETICE

Izbroji konje u svakome polju i izračunaj koliko ih ukupno ima.



+	=	

16	34	25	33	48	66	29	55	29	18
65	29	47	59	34	18	55	26	43	74



Izračunaj!

- | | | | |
|---------------|---------------|---------------|---------------|
| 48 + 39 = ___ | 37 + 18 = ___ | 36 + 49 = ___ | 39 + 22 = ___ |
| 45 + 45 = ___ | 54 + 28 = ___ | 68 + 32 = ___ | 27 + 25 = ___ |
| 19 + 17 = ___ | 19 + 67 = ___ | 57 + 23 = ___ | 46 + 27 = ___ |

Izračunaj!

Prvi pribrojnik	56	38	29	15	46	52	64	57	35	24
Drugi pribrojnik	45	38	35	67	44	29	18	19	36	48
Zbroj										

Izračunaj i usporedi!



$25 + 25$	$34 + 26$
$36 + 14$	$27 + 14$
$45 + 15$	$64 + 19$
$48 + 26$	$17 + 63$
$55 + 37$	$48 + 34$

$45 + 25$	$14 + 66$
$39 + 12$	$11 + 49$
$46 + 15$	$24 + 37$
$33 + 57$	$26 + 54$
$17 + 17$	$28 + 28$

$16 + 67$	$49 + 36$
$78 + 12$	$39 + 37$
$33 + 67$	$55 + 45$
$49 + 49$	$29 + 56$
$16 + 57$	$57 + 16$

Izračunaj!

